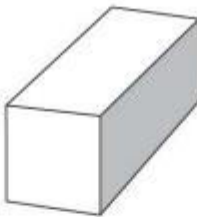
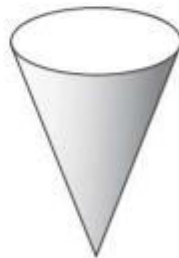
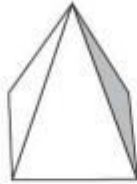


3D SHAPES

KS1 – 2003 Paper 1

1.

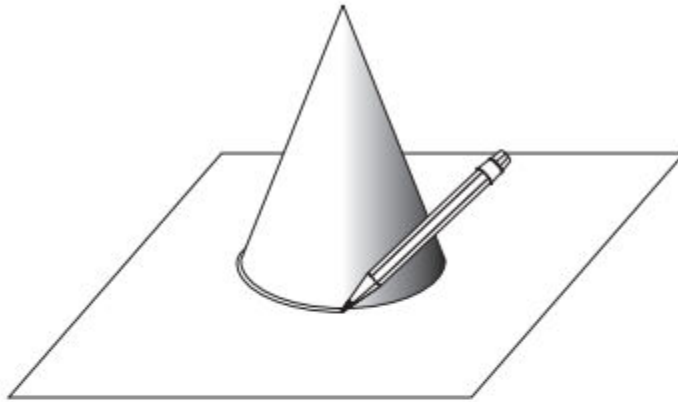
21 Tick (✓) **each** picture of a **cylinder**.



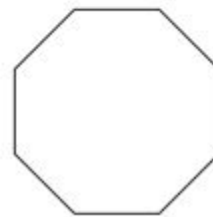


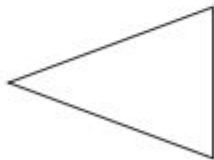
2.

8

Fred draws round the bottom of a cone.



Tick (✓) the shape that Fred draws.



3.

23

Two of these sentences are correct.

Tick (✓) them.

A cube has **curved faces**.

A cube has **6 faces**.

A cube has **more than 6 corners**.

A cube has **fewer than 6 edges**.



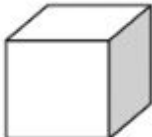
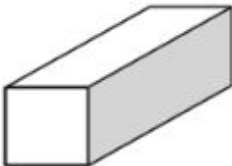


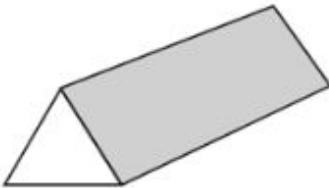
KS1 – 2016 Paper - Reasoning

4.

14

One shape is in the **wrong** place on the sorting grid.

Draw a cross (X) on it.

Shapes with a square face	Shapes without a square face
  	 

KS1 – 2016 Paper – Reasoning (Second)

5.

17



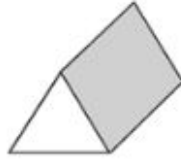
A



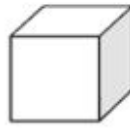
B



C



D



E

Which shape has exactly **5** faces?

Write the letter.



1 mark

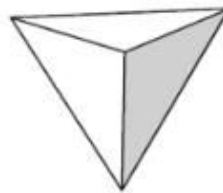
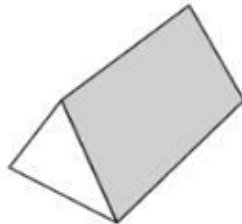
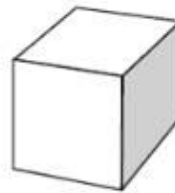
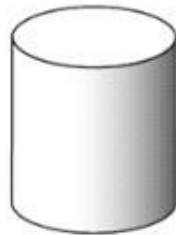
KS1 – 2017 Paper – Reasoning

6.

29

Two shapes have **more than 8** edges.

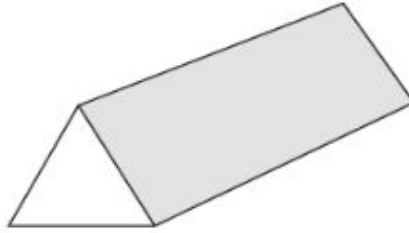
Tick them.



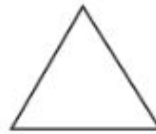
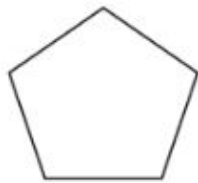
1 mark

7.

16 Here is a prism.



Tick **all** the shapes that are faces on this prism.




1 mark